

P1 Singapore Math

Number Patterns

$$+ - \times \div$$

Name: _____ Date: _____



Learning Goal:

Identify the number patterns with numbers between 0 to 10.

Here is an example
before we start!

1, 2, 3, 4, ____, ____, 7

+1 +1 +1 +1 +1 +1

1, 2, 3, 4, 5, 6, 7

Let's give it a try

Question 1

4, 5, 6, _____, 8, _____, 10

Question 2


1, _____, 3, _____, 5, 6, 7

Question 3

3, _____, 5, _____, 7, 8, 9, 10


Question 4

_____, 1, 2, 3, _____, 5, 6, _____




More Examples:

Example 1:

1, 3, __, 7, __

 +2 +2 +2 +2


1, 3, 5, 7, 9

Example 2:

6, 5, 4, __, 2, __

 -1 -1 -1 -1 -1

6, 5, 4, 3, 2, 1

Let's give more questions a try 



Question 5

1, 3, 5, _____, 9

Question 6


2, 4, _____, 8, _____

Question 7

6, 5, 4, _____, 2, _____

Question 8

9, _____, 7, _____, 5, 4, 3, 2



Question 9

____, 9, 8, 7, ____, 5, 4, ____

Question 10

5, 4, 3, ____, 1, ____

Question 11

8, ____, 6, 5, ____, 3, 2

Question 12

10, 8, 6, 4, ____



ANSWER KEY

Question 1

4, 5, 6, 7, 8, 9, 10

Question 2

1, 2, 3, 4, 5, 6, 7

Question 3

3, 4, 5, 6, 7, 8, 9, 10

Question 4

0, 1, 2, 3, 4, 5, 6, 7

Question 5

1, 3, 5, 7, 9

Question 6

2, 4, 6, 8, 10

ANSWER KEY

Question 7

6, 5, 4, 3, 2, 1

Question 8

9, 8, 7, 6, 5, 4, 3, 2

Question 9

10, 9, 8, 7, 6, 5, 4, 3

Question 10

5, 4, 3, 2, 1, 0

Question 11

8, 7, 6, 5, 4, 3, 2

Question 12

10, 8, 6, 4, 2